



Name

Date


# Division



$6 \div 3 = \square$



$9 \div 3 = \square$




$12 \div 6 = \square$




$4 \div 2 = \square$



$8 \div 4 = \square$



$14 \div 2 = \square$



$15 \div 5 = \square$