



Name

Date


Division




$12 \div 6 = \square$



$8 \div 4 = \square$




$10 \div 2 = \square$




$6 \div 2 = \square$



$8 \div 2 = \square$



$14 \div 7 = \square$



$15 \div 3 = \square$