



# Subtraction



$$5 - 2 = \square$$



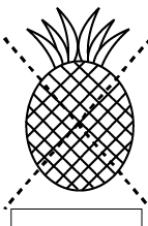
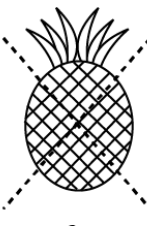
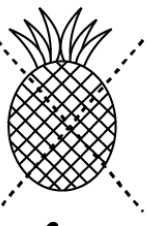
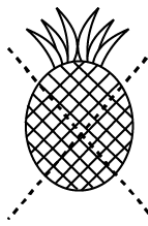


$$6 - 5 = \square$$



$$8 - 3 = \square$$



$$9 - 6 = \square$$



$$6 - 4 = \square$$