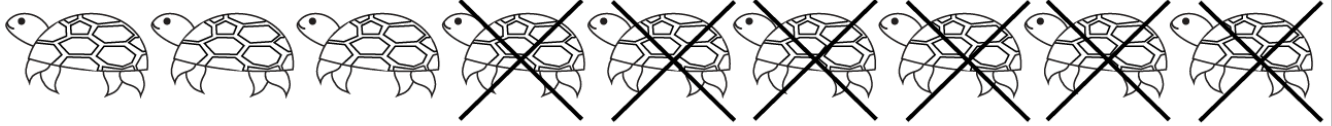



# Subtraction



$$9 - 6 = \square$$



$$6 - 3 = \square$$



$$8 - 2 = \square$$



$$9 - 3 = \square$$




$$7 - 3 = \square$$



$$5 - 2 = \square$$



$$9 - 7 = \square$$



$$8 - 3 = \square$$