






Addition





$$7 + 2 = \square$$





$$5 + 3 = \square$$



$$2 + 2 = \square$$





$$3 + 4 = \square$$



$$3 + 2 = \square$$



$$6 + 2 = \square$$



$$3 + 3 = \square$$

$$5 + 3 = \square$$