




Addition



$$3 + 2 = \square$$




$$2 + 3 = \square$$




$$1 + 3 = \square$$



$$2 + 2 = \square$$



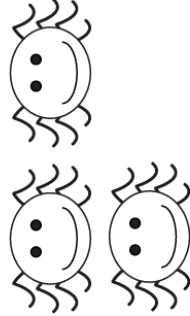
$$4 + 1 = \square$$



$$1 + 1 = \square$$



$$1 + 2 = \square$$



$$3 + 1 = \square$$