
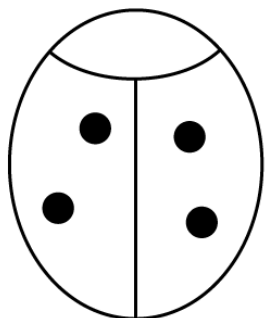


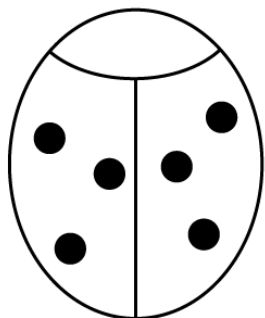
Doubles



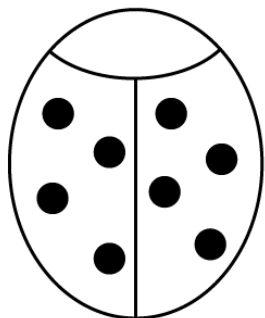
$$1 + 1 = \square$$



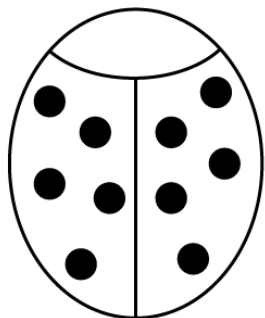
$$2 + 2 = \square$$



$$3 + 3 = \square$$



$$4 + 4 = \square$$



$$5 + 5 = \square$$