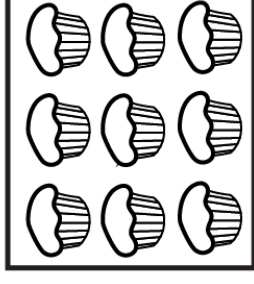
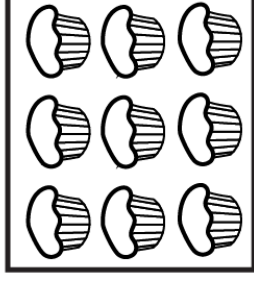
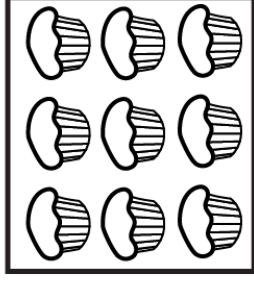
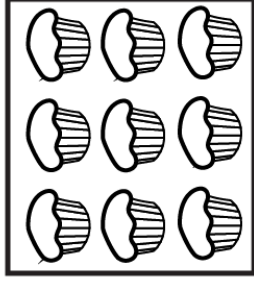


There are 6 boxes. Each box has 4 pencils. How many pencils are there altogether?



There are 4 boxes. Each box has 9 cupcakes. How many cupcakes are there altogether?