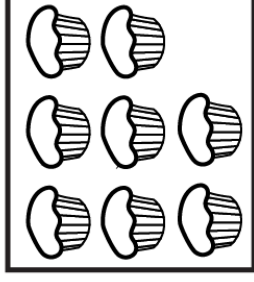
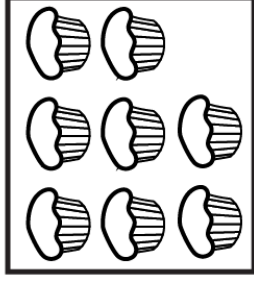
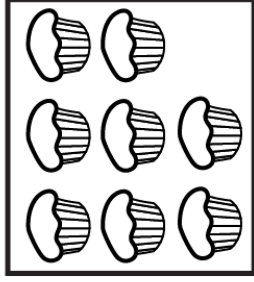
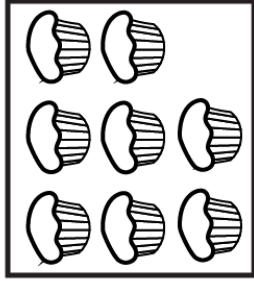


There are 8 boxes. Each box has 3 pencils. How many pencils are there altogether?



There are 4 boxes. Each box has 6 cupcakes. How many cupcakes are there altogether?