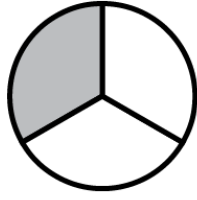
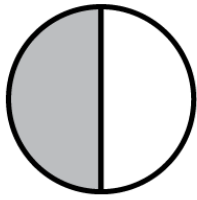
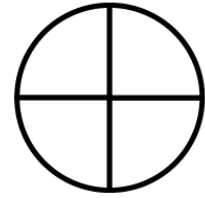
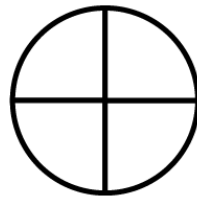


### Comparing Fractions

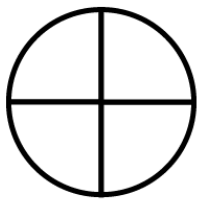
Shade and use  $>$ ,  $<$ , or  $=$  to compare the fractions.




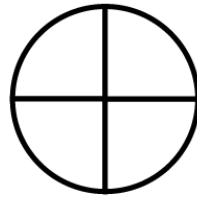
$$\frac{1}{2} > \frac{1}{3}$$



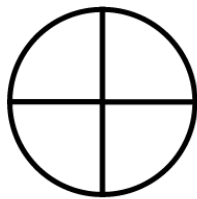

$$\frac{1}{4} \square \frac{2}{4}$$



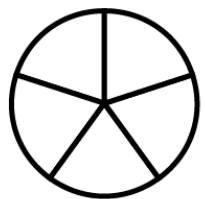
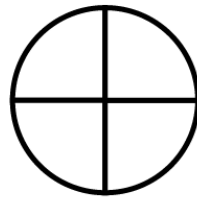
$$\frac{1}{4} \square \frac{1}{3}$$



$$\frac{1}{4} \square \frac{2}{8}$$



$$\frac{1}{2} \square \frac{3}{4}$$



$$\frac{2}{4} \square \frac{3}{5}$$