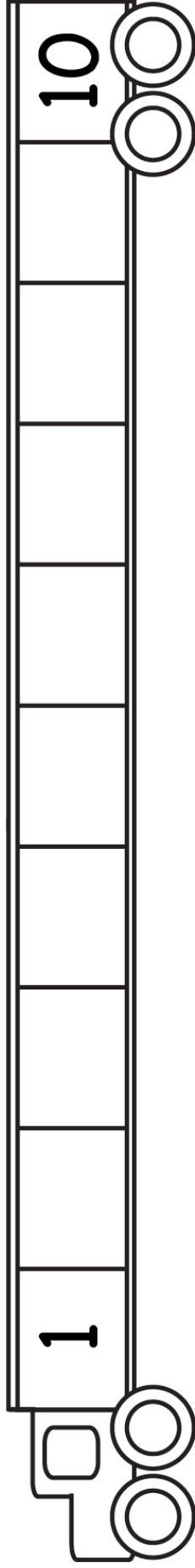
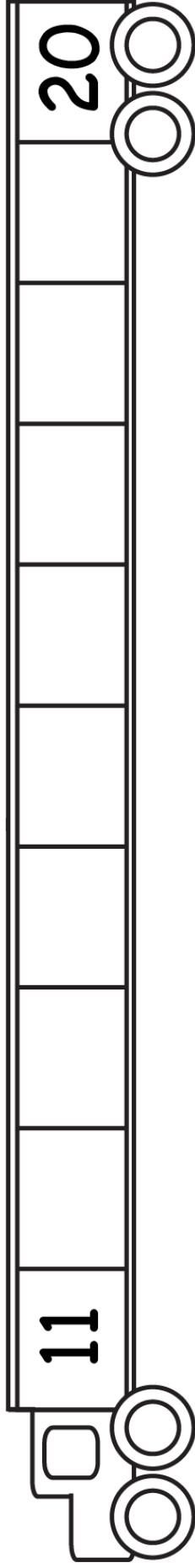


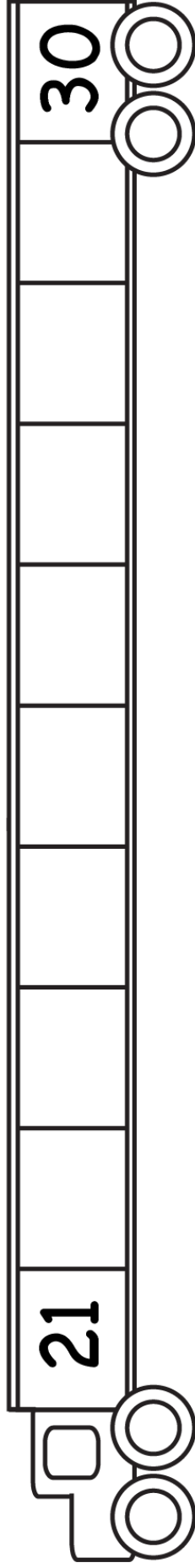
# Write each missing number.



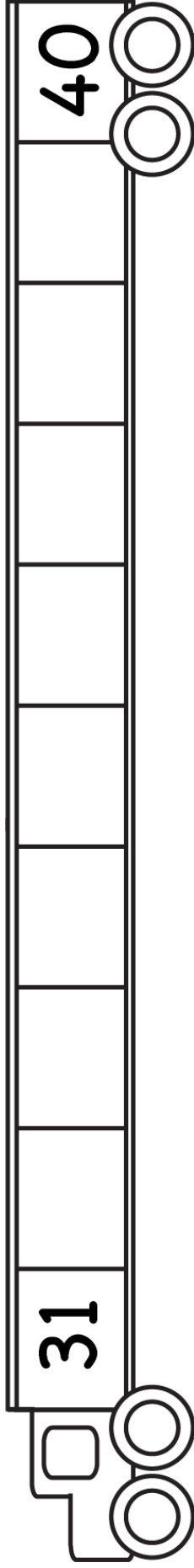
A number line starting at 1 and ending at 10. There are 9 empty boxes between the numbers 1 and 10. The number 1 is written in the first box, and 10 is written in the last box. The number line is decorated with a pair of scissors at each end.



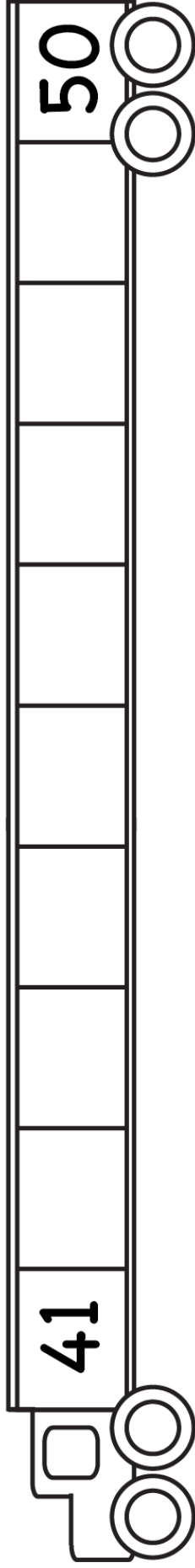
A number line starting at 11 and ending at 20. There are 9 empty boxes between the numbers 11 and 20. The number 11 is written in the first box, and 20 is written in the last box. The number line is decorated with a pair of scissors at each end.



A number line starting at 21 and ending at 30. There are 9 empty boxes between the numbers 21 and 30. The number 21 is written in the first box, and 30 is written in the last box. The number line is decorated with a pair of scissors at each end.



A number line starting at 31 and ending at 40. There are 9 empty boxes between the numbers 31 and 40. The number 31 is written in the first box, and 40 is written in the last box. The number line is decorated with a pair of scissors at each end.



A number line starting at 41 and ending at 50. There are 9 empty boxes between the numbers 41 and 50. The number 41 is written in the first box, and 50 is written in the last box. The number line is decorated with a pair of scissors at each end.