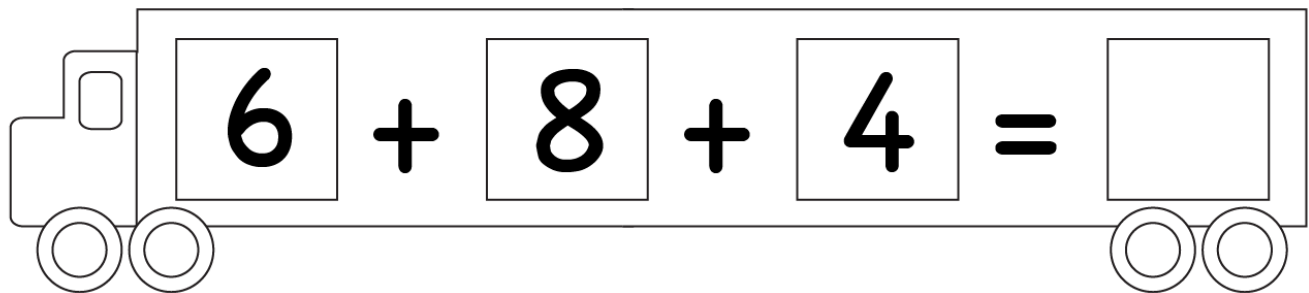
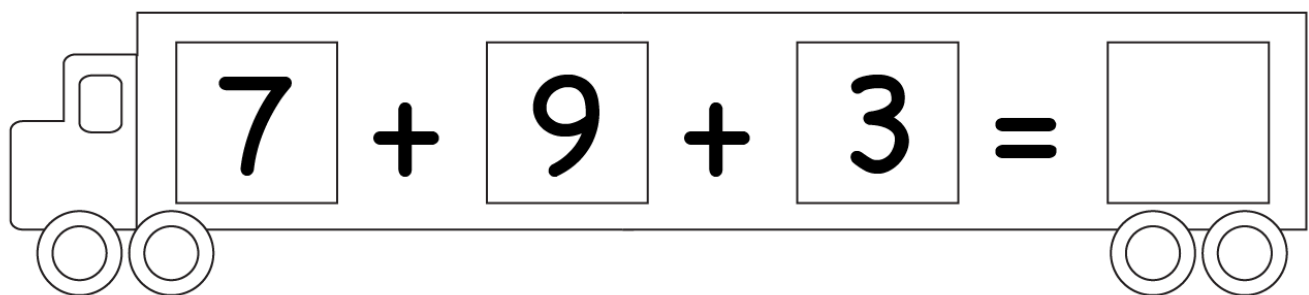


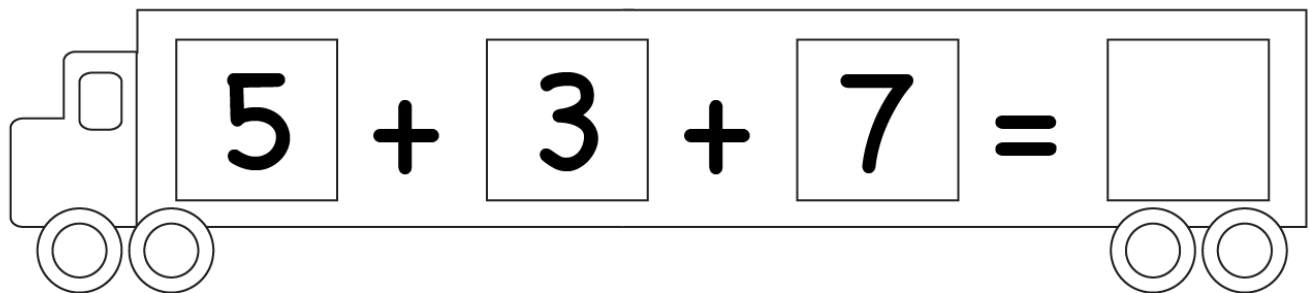
Adding 3 Numbers

A tractor-shaped box with a steering wheel on the left and two wheels on the right. Inside the box is the equation $6 + 8 + 4 = \square$.

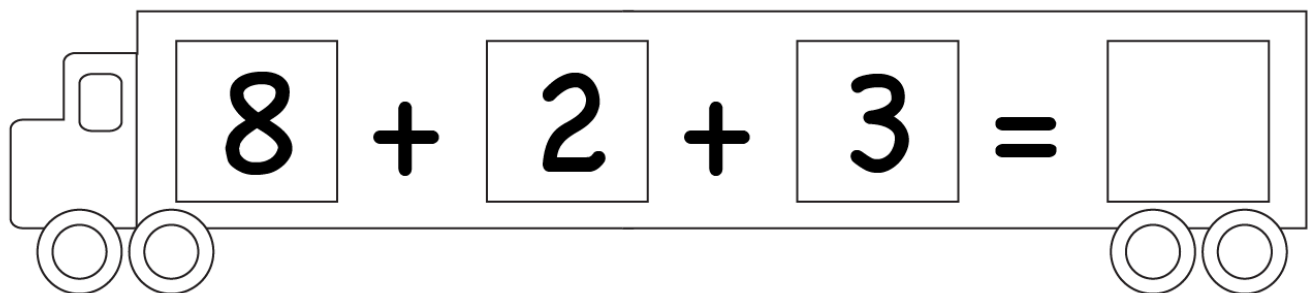
$6 + 8 + 4 = \square$

A tractor-shaped box with a steering wheel on the left and two wheels on the right. Inside the box is the equation $7 + 9 + 3 = \square$.

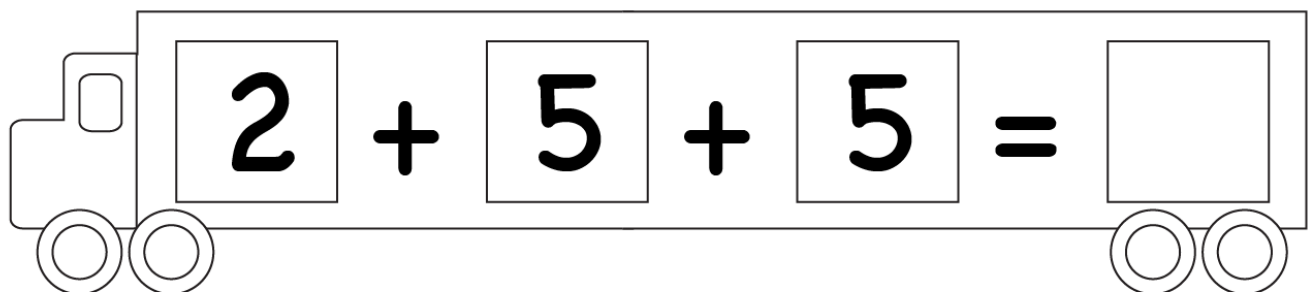
$7 + 9 + 3 = \square$

A tractor-shaped box with a steering wheel on the left and two wheels on the right. Inside the box is the equation $5 + 3 + 7 = \square$.

$5 + 3 + 7 = \square$

A tractor-shaped box with a steering wheel on the left and two wheels on the right. Inside the box is the equation $8 + 2 + 3 = \square$.

$8 + 2 + 3 = \square$

A tractor-shaped box with a steering wheel on the left and two wheels on the right. Inside the box is the equation $2 + 5 + 5 = \square$.

$2 + 5 + 5 = \square$