




Subtraction




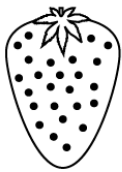
$$5 - 3 = \square$$



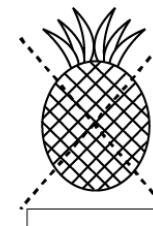

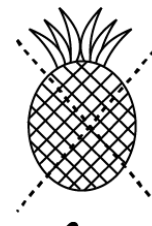



$$6 - 4 = \square$$



$$8 - 4 = \square$$



$$9 - 5 = \square$$



$$6 - 3 = \square$$