

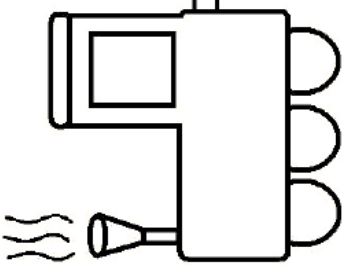
Name \_\_\_\_\_ Date \_\_\_\_\_

Write each missing number.



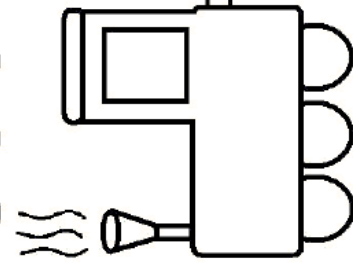
1 3 5 7 10

A train engine with a smokestack emitting smoke, connected to a train car. The train car has five numbered compartments: 1, 3, 5, 7, and 10.



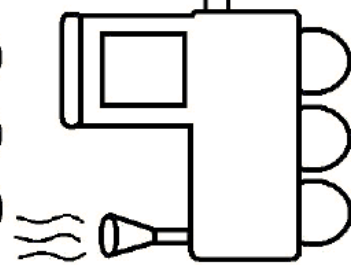
11 13 15 17 20

A train engine with a smokestack emitting smoke, connected to a train car. The train car has five numbered compartments: 11, 13, 15, 17, and 20.



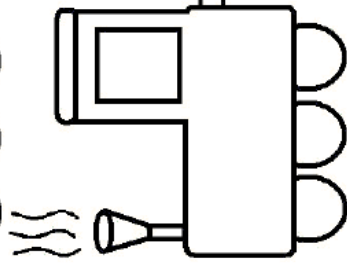
21 23 25 27 30

A train engine with a smokestack emitting smoke, connected to a train car. The train car has five numbered compartments: 21, 23, 25, 27, and 30.



31 33 35 37 40

A train engine with a smokestack emitting smoke, connected to a train car. The train car has five numbered compartments: 31, 33, 35, 37, and 40.



41 43 45 47 50

A train engine with a smokestack emitting smoke, connected to a train car. The train car has five numbered compartments: 41, 43, 45, 47, and 50.