




# Addition



$4 + 5 = \square$



$\square$




$5 + 3 = \square$




$\square$




$3 + 4 = \square$



$\square$




$4 + 4 = \square$




$\square$



$2 + 5 = \square$



$\square$




$6 + 2 = \square$



$\square$



$2 + 7 = \square$



$\square$



$3 + 2 = \square$



$\square$