
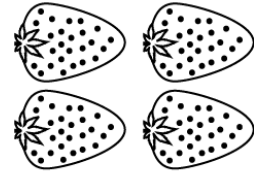




Addition



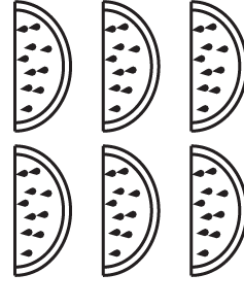
$$4 + 4 = \square$$

$$4 + 3 = \square$$



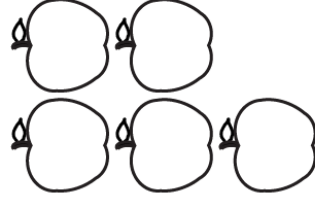
$$3 + 3 = \square$$

$$3 + 6 = \square$$



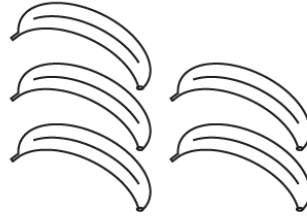
$$4 + 2 = \square$$

$$4 + 6 = \square$$



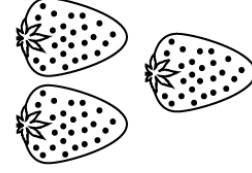
$$2 + 2 = \square$$

$$2 + 5 = \square$$



$$5 + 2 = \square$$

$$5 + 3 = \square$$



$$2 + 2 = \square$$

$$2 + 3 = \square$$