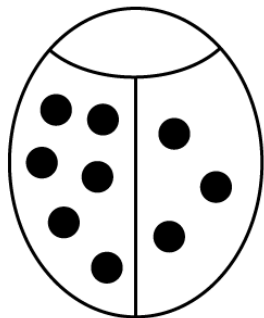
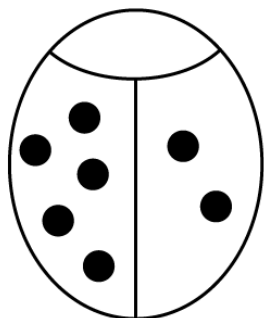


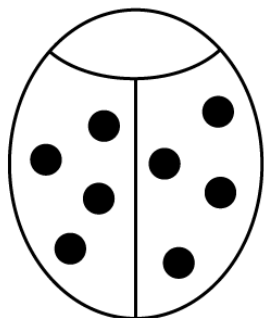
Addition



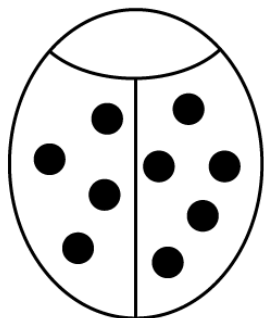
$$6 + 3 = \square$$



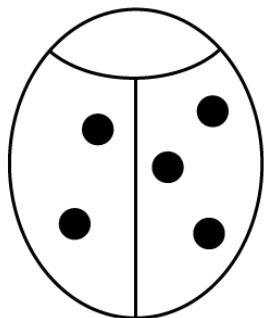
$$5 + 2 = \square$$



$$4 + 4 = \square$$



$$4 + 5 = \square$$



$$2 + 3 = \square$$