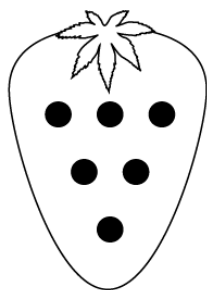
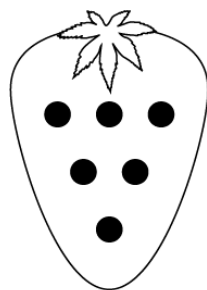


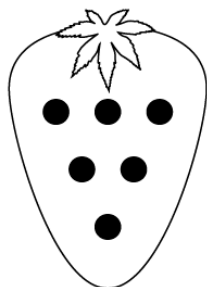
# Subtraction



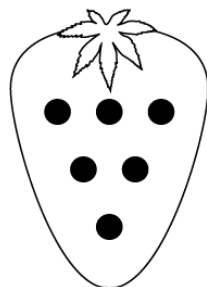
$6 - 1 = \square$



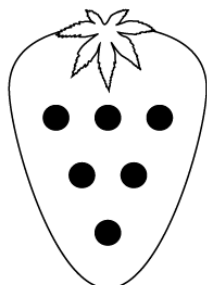
$6 - 4 = \square$



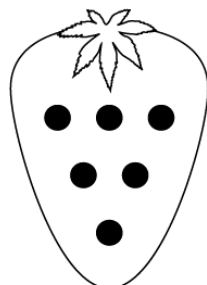
$6 - 2 = \square$



$6 - 5 = \square$



$6 - 3 = \square$



$6 - 6 = \square$