
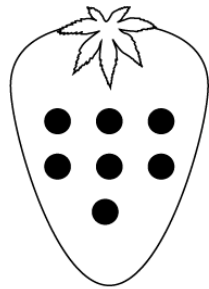


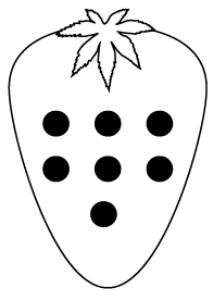
# Subtraction



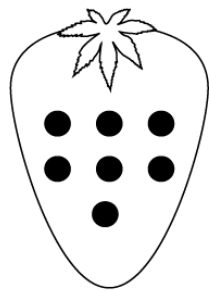
$7 - 1 = \square$



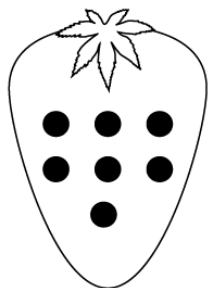
$7 - 5 = \square$



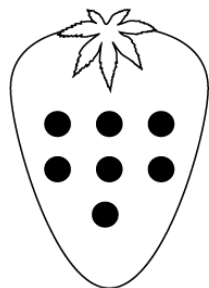
$7 - 2 = \square$



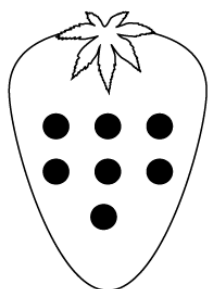
$7 - 6 = \square$



$7 - 3 = \square$



$7 - 7 = \square$



$7 - 4 = \square$