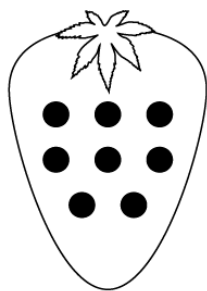
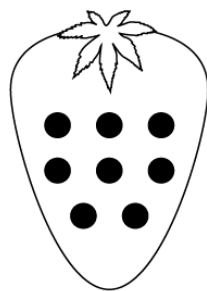


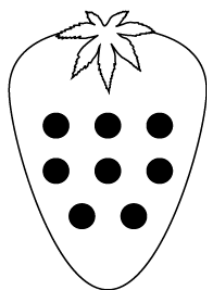
# Subtraction



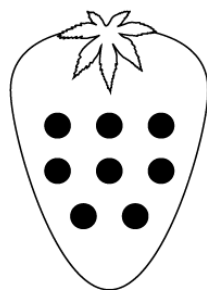
$8 - 1 = \square$



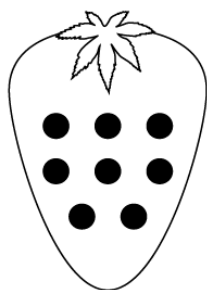
$8 - 5 = \square$



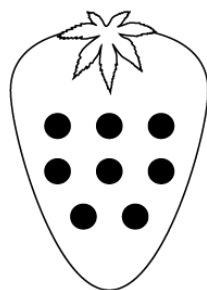
$8 - 2 = \square$



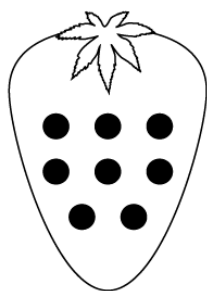
$8 - 6 = \square$



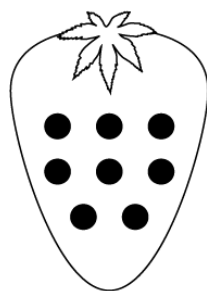
$8 - 3 = \square$



$8 - 7 = \square$



$8 - 4 = \square$



$8 - 8 = \square$