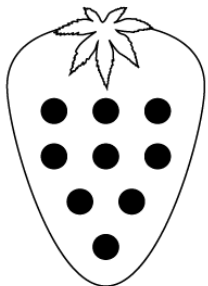
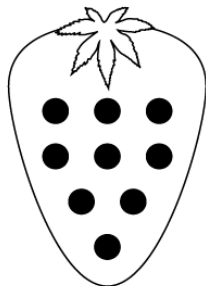


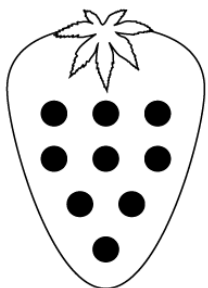
# Subtraction



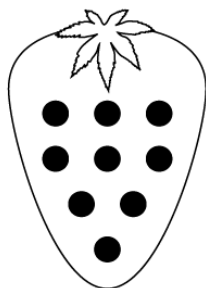
$9 - 1 = \square$



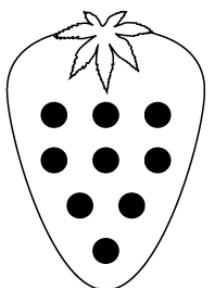
$9 - 6 = \square$



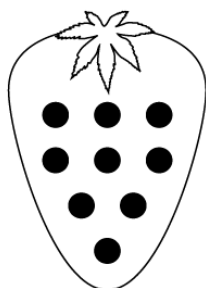
$9 - 2 = \square$



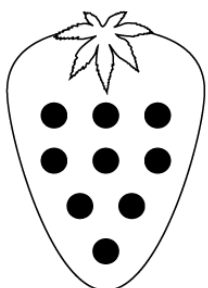
$9 - 7 = \square$



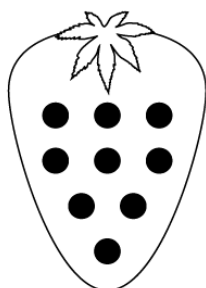
$9 - 3 = \square$



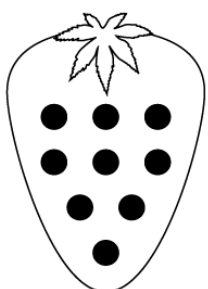
$9 - 8 = \square$



$9 - 4 = \square$



$9 - 9 = \square$



$9 - 5 = \square$